

# Parts of a Group

Write a fraction that names what part is shaded.

1.




\_\_\_\_\_

2.



\_\_\_\_\_

3.




\_\_\_\_\_

4.



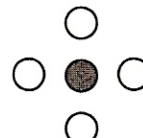
\_\_\_\_\_

5.



\_\_\_\_\_

6.



\_\_\_\_\_

Draw a picture, and then write a fraction.

7. Six of eleven balloons are blue.

\_\_\_\_\_

8. Four out of seven hats have stars.

\_\_\_\_\_

9. All of five kittens are smiling.

\_\_\_\_\_

10. One of four animals is a chimpanzee.

\_\_\_\_\_

## Problem Solving

11. Five of 12 students are in the school chorus. What part of the students are in the chorus?

\_\_\_\_\_

12. Twenty of 25 students voted for class president. What part of the class did **not** vote for president?

\_\_\_\_\_