
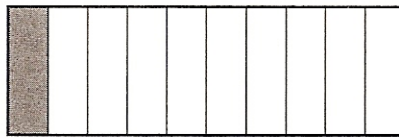


Explore Fractions and Decimals


You can use models to show decimals.



This model shows 1.

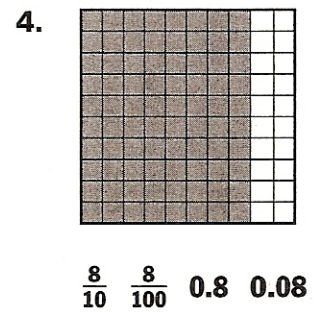
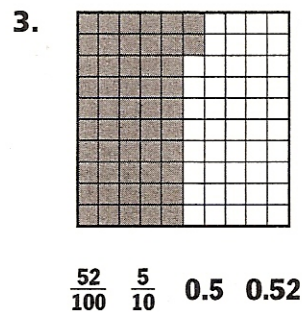
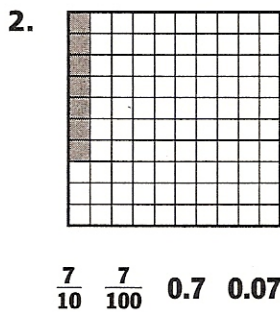
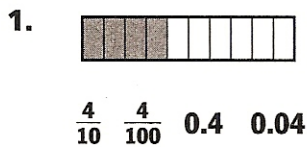


This model shows 1 divided into 10 equal parts. You can shade the model to show $\frac{1}{10}$. You can write $\frac{1}{10}$ as a decimal: 0.1.



This model shows 1 divided into 100 equal parts. You can shade the model to show $\frac{1}{100}$. You can write $\frac{1}{100}$ as a decimal: 0.01.

Look at each model. Circle the fraction and the decimal for the shaded part.



Look at each model. Write a decimal for each shaded part.

