



Explore Subtracting Decimals

Use the models to find each difference.


1.



2.



3.



$$0.68 - 0.35 = \underline{\hspace{2cm}}$$

$$1.12 - 0.7 = \underline{\hspace{2cm}}$$

$$1.8 - 1.1 = \underline{\hspace{2cm}}$$

Find each difference.

$$\begin{array}{r} 4. \quad 0.9 \\ - 0.3 \\ \hline \end{array}$$

$$\begin{array}{r} 5. \quad 1.2 \\ - 0.6 \\ \hline \end{array}$$

$$\begin{array}{r} 6. \quad 2.7 \\ - 0.9 \\ \hline \end{array}$$

$$\begin{array}{r} 7. \quad 2.5 \\ - 1.6 \\ \hline \end{array}$$

$$\begin{array}{r} 8. \quad 2.1 \\ - 1.7 \\ \hline \end{array}$$

$$\begin{array}{r} 9. \quad 1.67 \\ - 0.48 \\ \hline \end{array}$$

$$\begin{array}{r} 10. \quad 1.6 \\ - 1.48 \\ \hline \end{array}$$

$$\begin{array}{r} 11. \quad 3.11 \\ - 1.12 \\ \hline \end{array}$$

$$\begin{array}{r} 12. \quad 3.7 \\ - 2.91 \\ \hline \end{array}$$

$$\begin{array}{r} 13. \quad 1.2 \\ - 1.13 \\ \hline \end{array}$$

$$\begin{array}{r} 14. \quad 3.6 \\ - 1.47 \\ \hline \end{array}$$

$$\begin{array}{r} 15. \quad 2.02 \\ - 1.79 \\ \hline \end{array}$$

$$\begin{array}{r} 16. \quad 0.95 \\ - 0.67 \\ \hline \end{array}$$

$$\begin{array}{r} 17. \quad 0.8 \\ - 0.25 \\ \hline \end{array}$$

$$\begin{array}{r} 18. \quad 0.74 \\ - 0.59 \\ \hline \end{array}$$

$$\begin{array}{r} 19. \quad 1.7 \\ - 0.35 \\ \hline \end{array}$$

$$\begin{array}{r} 20. \quad 2.04 \\ - 1.69 \\ \hline \end{array}$$

$$\begin{array}{r} 21. \quad 1.03 \\ - 0.6 \\ \hline \end{array}$$

$$\begin{array}{r} 22. \quad 0.80 \\ - 0.54 \\ \hline \end{array}$$

$$\begin{array}{r} 23. \quad 2.0 \\ - 1.06 \\ \hline \end{array}$$