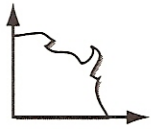
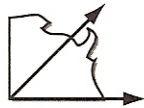


Angles

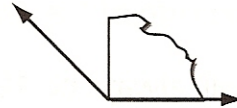
Angles are formed by two rays that have the same endpoint.



A **right** angle forms a square corner.



An **acute** angle is less than a right angle.

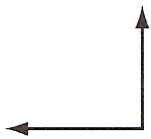


An **obtuse** angle is greater than a right angle.

Identify each angle.

Write acute, obtuse, or right. Use the corner of a sheet of paper to help you.

1.



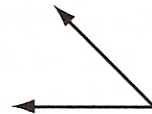
2.



3.



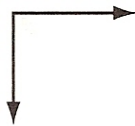
4.



5.



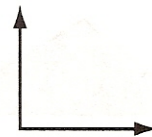
6.



7.

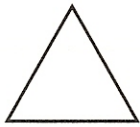


8.



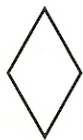
Complete.

9.



This triangle has 3 _____ angles.

10.



This kite has 2 _____ angles and 2 _____ angles.

11.



This pentagon has 2 _____ angles, 2 _____ angles, and 1 _____ angle.