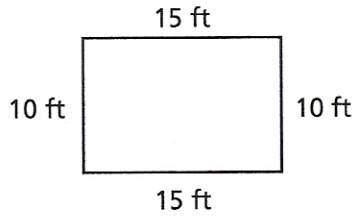


Perimeter

Perimeter is the distance around a closed figure. To find the perimeter, add the lengths of all the sides.

To find the perimeter of the rectangle, add the lengths of the sides.

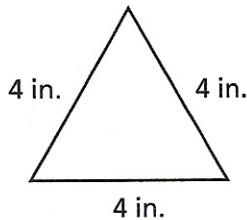
$$\begin{array}{r} 10\text{ft} \\ 15\text{ft} \\ 10\text{ft} \\ + 15\text{ft} \\ \hline 50\text{ft} \end{array}$$



The perimeter of the rectangle is 50 ft.

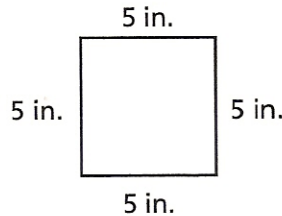
Find the perimeter of each figure.

1.



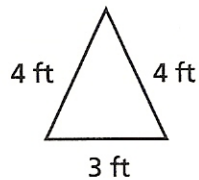
_____ + _____ + _____ = _____

2.

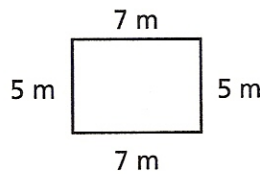


_____ + _____ + _____ + _____ = _____

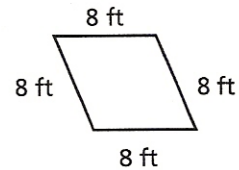
3.



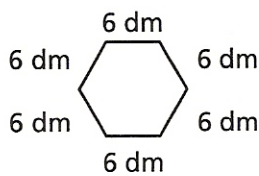
4.



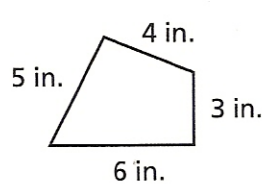
5.



6.



7.



8.

