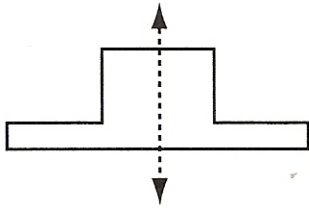


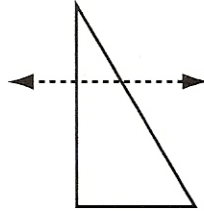
Symmetry

Is the dotted line a line of symmetry?

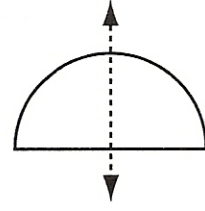
1.



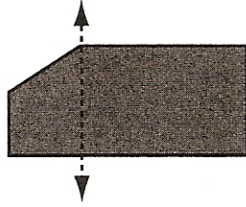
2.



3.



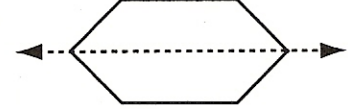
4.



5.




6.

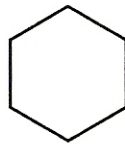


Is the figure symmetrical? If yes, draw its lines of symmetry.

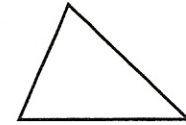
7.



8.



9.

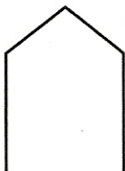


10. On a separate sheet of paper, draw a figure with rotational symmetry.

11. On a separate sheet of paper, draw a figure with bilateral symmetry.

Complete the drawing to make it symmetrical.

12.



13.



14.

