
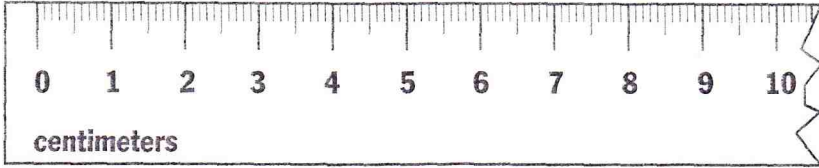



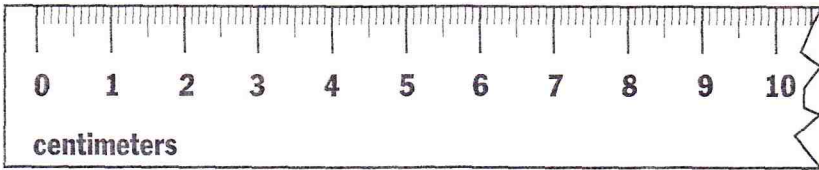
Explore Metric Length


Measure to the nearest centimeter and millimeter.

1.  _____ cm _____ mm




2.  _____ cm _____ mm



3.  _____ cm _____ mm

4.  _____ cm _____ mm

5.  _____ cm _____ mm

6.  _____ cm _____ mm

Choose an appropriate unit. Write *mm*, *cm*, *m*, or *km*.

7. length of your arm _____

8. thickness of a penny _____

9. length of a bus _____

10. height of a mountain _____

11. distance from your home to school _____

12. length of a shoelace _____

13. length of a canoe _____

14. height of a diving board _____

Problem Solving

15. Kay is reading a book. Is the book's thickness most likely to be 19 mm or 19 km?

16. Scott kicked a football. Is the distance he kicked it most likely to be 35 m or 35 km?

