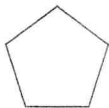


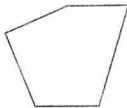
Symmetry

Tell which figures are symmetric about a line.

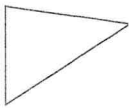
1.




2.



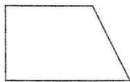
3.



4.



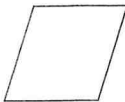
5.




6.



7.



8.



Draw all the lines of symmetry.

9.



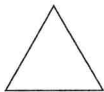
10.



11.



12.



13.



14.



15.



16.



Problem Solving

17. Print your name in uppercase letters. Then print your name in lowercase letters. Show which letters are symmetric.

18. Draw a polygon with more than four sides that has a least one line of symmetry. Name the polygon you draw.
