

# 3-Dimensional Figures from Different Views

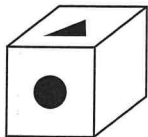
Draw the top view, front view, and a side view of the shape.

Top

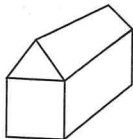
Front

Side


1.



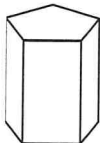
2.



3.



4.



## Problem Solving

5. This staircase is made from cubes. Draw the top view, front view, and side view of the staircase.

