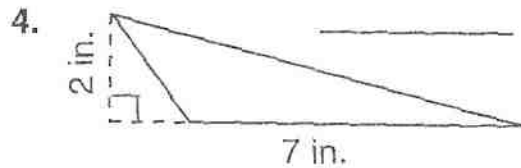
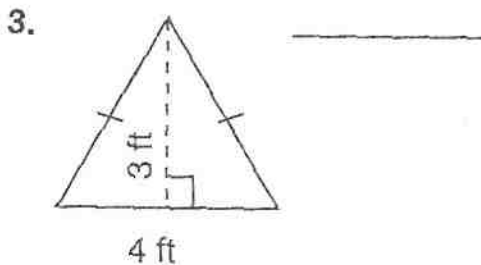
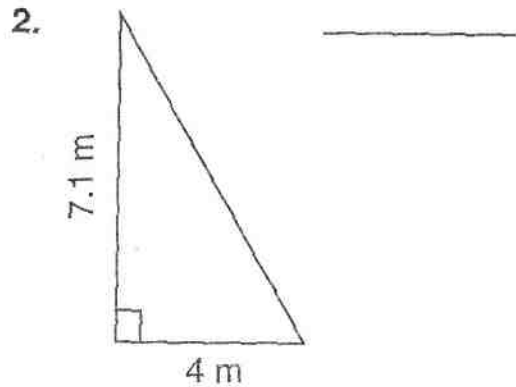
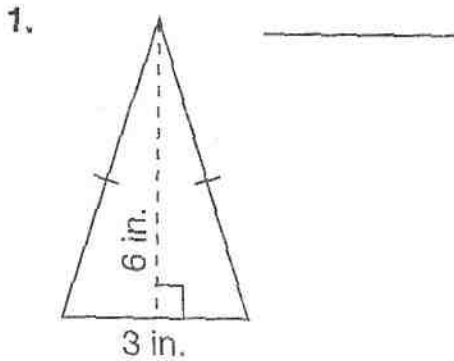




12-5 Explore Area of Triangles

Find the area of each triangle.



Solve.

5. At the museum, Julia sees a painting on a triangular canvas. The triangle's base is 4 feet, and its height is 2.5 feet. What is the area of the painting?
- _____

6. A park near Tyler's house has the shape of a right triangle with a base of 160 meters and a height of 200 meters. What is the area of the park?
- _____

Spiral Review

Tell whether the figures are congruent, similar, or neither.

