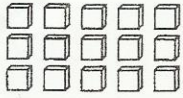


Relate Multiplication and Division Facts

Find $15 \div 5$. Think: How many groups of 5 are in 15?

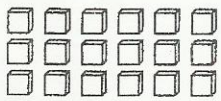


$$5 \times ? = 15 \rightarrow 5 \times 3 = 15$$

There are 3 groups of 5 in 15. So, $15 \div 5 = 3$.

Write a related multiplication fact and complete the division sentence.

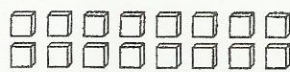
1. $18 \div 6$



$$6 \times \square = 18$$

$$18 \div 6 = \square$$

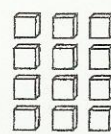
2. $16 \div 8$



$$8 \times \square = 16$$

$$16 \div 8 = \square$$

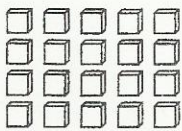
3. $12 \div 3$



$$4 \times \square = 12$$

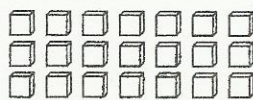
$$12 \div 3 = \square$$

4. $20 \div 5$



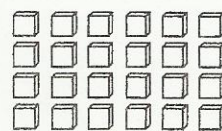
$$20 \div 5 = \square$$

5. $21 \div 7$




$$21 \div 7 = \square$$

6. $24 \div 6$



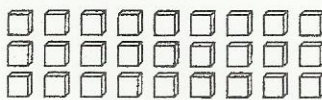
$$24 \div 6 = \square$$

7. $30 \div 5$



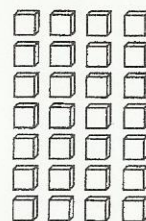
$$30 \div 5 = \square$$

8. $27 \div 9$



$$27 \div 9 = \square$$

9. $28 \div 4$



$$28 \div 4 = \square$$