

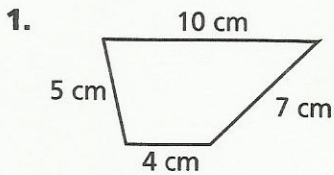


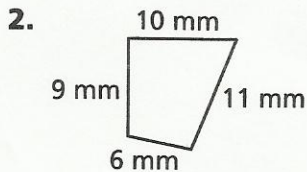
Name _____

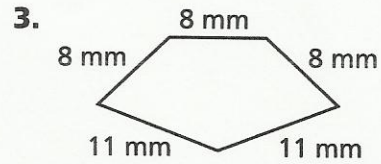
Perimeter


P 10-11
PRACTICE


Find the perimeter of each figure.

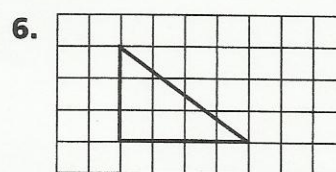




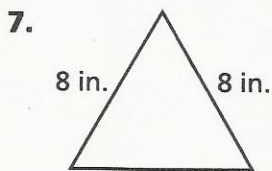




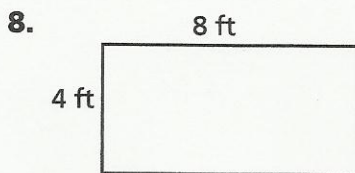




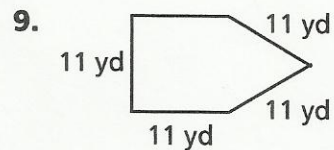
Algebra & Functions Find the length of each missing side.



perimeter = 24 in.



perimeter = 24 ft



perimeter = 55 yd

Problem Solving

10. Gerry plans a rectangular garden plot that is 30 ft long and 15 ft wide. What is the perimeter of the garden plot?

11. A fence around a rectangular corral has a length of 180 ft and a width of 90 ft. What is the perimeter of the fence?
