
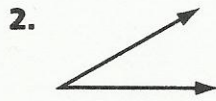
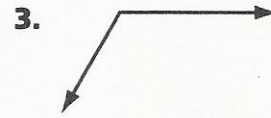


Angles

Write acute, obtuse, or right for each angle.

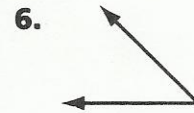




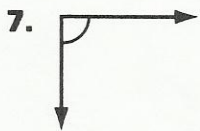




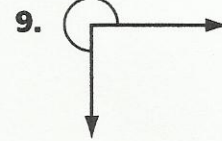




Write the degree measure and fraction of a turn for each angle.







Draw each figure.

10. a 4-sided figure with 1 right angle 11. a 3-sided figure with 3 acute angles