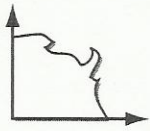
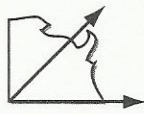


# Angles

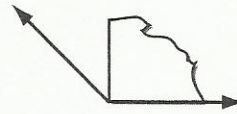
Angles are formed by two rays that have the same endpoint.



A **right** angle forms a square corner.



An **acute** angle is less than a right angle.

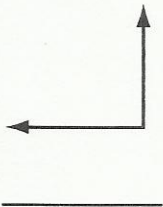


An **obtuse** angle is greater than a right angle.


Identify each angle.

Write acute, obtuse, or right. Use the corner of a sheet of paper to help you.

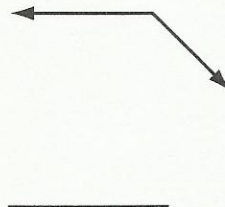
1.



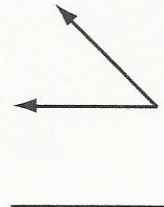
2.



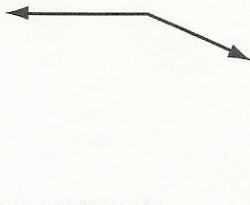
3.



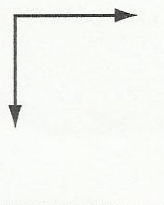
4.



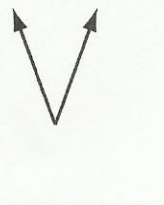
5.



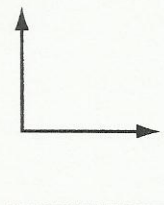
6.



7.

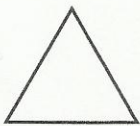


8.



Complete.

9.



This triangle has 3 \_\_\_\_\_ angles.

10.



This kite has 2 \_\_\_\_\_ angles and 2 \_\_\_\_\_ angles.

11.



This pentagon has 2 \_\_\_\_\_ angles, 2 \_\_\_\_\_ angles, and 1 \_\_\_\_\_ angle.