

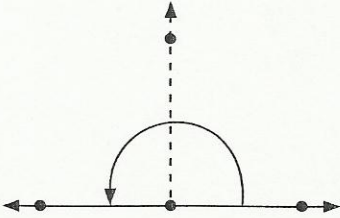
Name: \_\_\_\_\_

Date: \_\_\_\_\_

## Practice 3 Turns and Right Angles

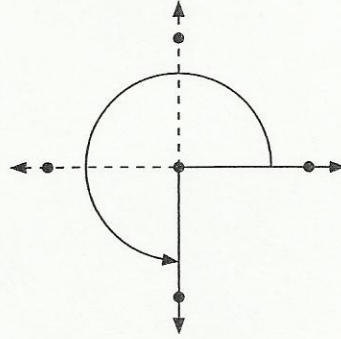
Find the measure of each angle.

1.



A  $\frac{1}{2}$ -turn is \_\_\_\_\_.

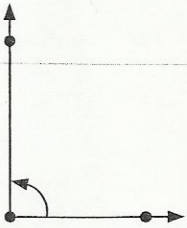
2.



A  $\frac{3}{4}$ -turn is \_\_\_\_\_.

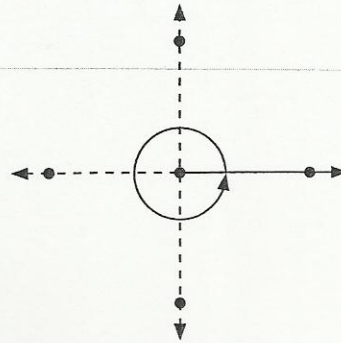
Fill in the blanks.

3.



A \_\_\_\_\_-turn is  $90^\circ$ .

4.



A \_\_\_\_\_ turn is  $360^\circ$ .