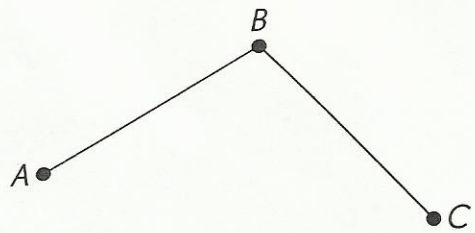


Name: \_\_\_\_\_

Date: \_\_\_\_\_

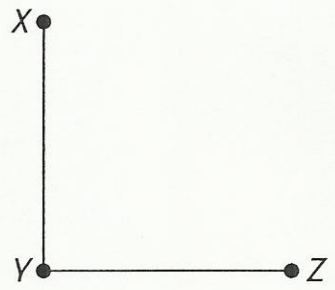
Name the angles formed by the lines.

6. a.



\_\_\_\_\_

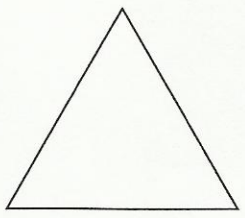
b.



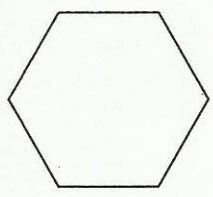
\_\_\_\_\_

Mark all the angles in each shape.

7. a.



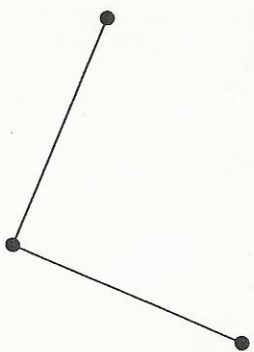
b.



Which of these are right angles? Use a folded piece of paper to help you. Write *yes* or *no*. Explain your answer.


8.

a.



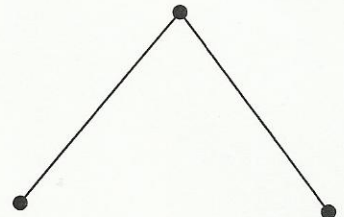
\_\_\_\_\_  
\_\_\_\_\_

b.



\_\_\_\_\_  
\_\_\_\_\_

c.



\_\_\_\_\_  
\_\_\_\_\_

© 2009 Marshall Cavendish International (Singapore) Private Limited. Copying is permitted; see page ii.