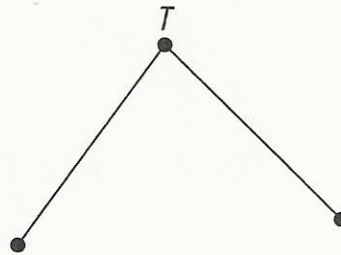
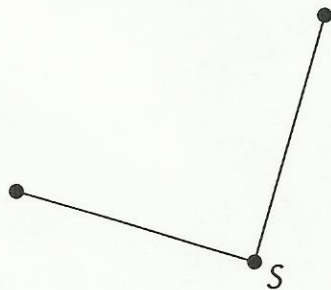
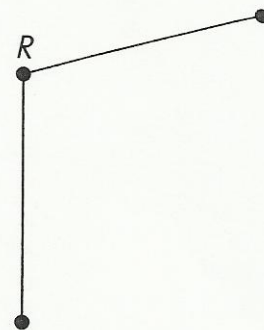
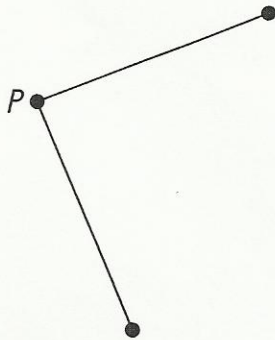


Name: \_\_\_\_\_

Date: \_\_\_\_\_

Study the angles and then answer the questions. Use a folded piece of paper to help you.

9.



a. Which angles are right angles?

\_\_\_\_\_

b. Which angles are smaller than right angles?

\_\_\_\_\_

c. Which angles are larger than right angles?

\_\_\_\_\_