

Name \_\_\_\_\_

# Parts of a Whole

**P** 11-1  
PRACTICE


Write a fraction for the part that is shaded.

1.



\_\_\_\_\_

2.




\_\_\_\_\_

3.




\_\_\_\_\_

4.



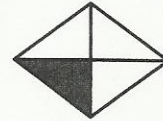
\_\_\_\_\_

5.



\_\_\_\_\_

6.



\_\_\_\_\_

7.



\_\_\_\_\_

8.



\_\_\_\_\_

Draw a rectangle with the fraction shaded.

9.  $\frac{1}{3}$

10.  $\frac{4}{5}$

11.  $\frac{5}{7}$

12.  $\frac{4}{8}$

13.  $\frac{4}{9}$

14.  $\frac{5}{6}$