

Name \_\_\_\_\_

to follow text page 275


### Angles

#### Practice

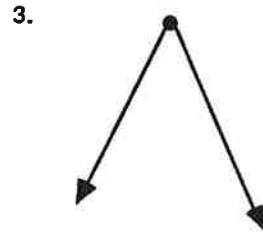
Write right, acute, or obtuse for each angle.



\_\_\_\_\_



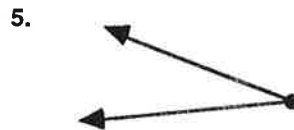
\_\_\_\_\_



\_\_\_\_\_



\_\_\_\_\_



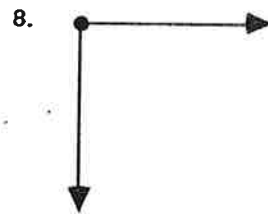
\_\_\_\_\_



\_\_\_\_\_



\_\_\_\_\_



\_\_\_\_\_



\_\_\_\_\_

#### Mixed Practice

Write  $<$ ,  $>$ , or  $=$  for each number pair.

10.  $1.38$  \_\_\_\_\_  $1.04$

11.  $0.087$  \_\_\_\_\_  $0.078$

12.  $0.19$  \_\_\_\_\_  $0.9$

13.  $\frac{3}{4}$  \_\_\_\_\_  $\frac{1}{2}$

14.  $\frac{3}{8}$  \_\_\_\_\_  $\frac{3}{5}$

15.  $\frac{5}{6}$  \_\_\_\_\_  $\frac{3}{7}$

16.  $\frac{7}{5}$  \_\_\_\_\_  $\frac{4}{3}$

17.  $\frac{3}{6}$  \_\_\_\_\_  $\frac{4}{8}$

18.  $1.376$  \_\_\_\_\_  $1.637$