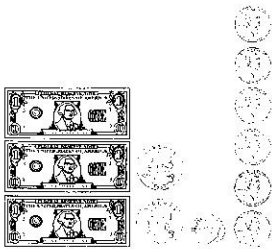


Count Money and Make Change




Write the amount of money shown.


1.



2.



3.



Tell which coins and bills make the amount.

4. \$0.89

5. \$3.62

6. \$7.67

Find the amount of change.

7. Price: \$0.59

Amount given: \$1.00

8. Price: \$2.45

Amount given: \$5.00

9. Price: \$7.81

Amount given: \$10.00

10. Price: \$0.86

Amount given: \$5.00

11. Price: \$3.09

Amount given: \$10.00

12. Price: \$9.25

Amount given: \$10.00

Problem Solving

13. Andy gives the cashier \$5.00 to pay for a \$3.75 calendar. How much change does he receive?

14. Lowanda receives 1 quarter, 2 dimes, and 1 nickel in change. How much money is that?
