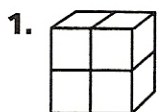
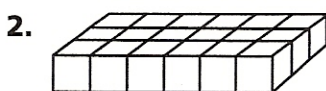
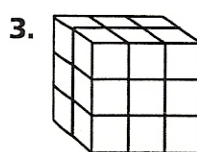


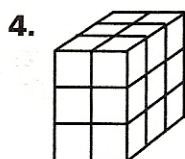
Explore Volume

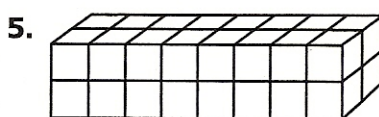
Find the volume of each rectangular prism.




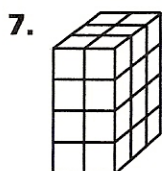


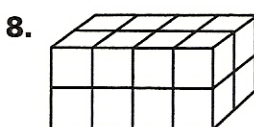


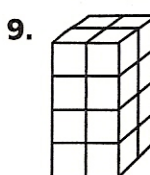


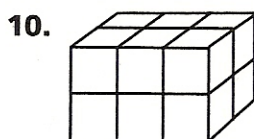


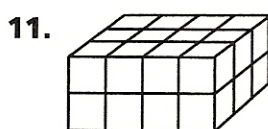


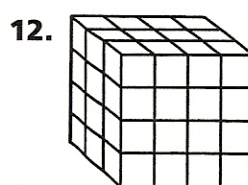












13. length: 9 in.
width: 5 in.
height: 4 in.

14. length: 5 m
width: 8 m
height: 6 m

15. length: 7 cm
width: 2 cm
height: 8 cm

16. length: 10 ft
width: 12 ft
height: 5 ft
